

SUPPORT NOTES

# NumberSense™

Mental Arithmetic for Workbook 1

# NumberSense Mental Arithmetic

## Workbook 1

This guide contains suggested activities linked to the corresponding NumberSense Workbook.

In Workbook 1, due to the developmental stage of children, questions are limited to:

- Number identification
- The concept of more or less
- Order of numbers (What comes before/after a certain number or between etc.)

*Note: these activities focus on up and down the number line rather than calculating and therefore, no number sentence is expected or created.*

Teachers should have a number line for the children to use as a reference. As the children gain more confidence, the teacher may want to omit the visual cue of the number line and have the children answer the questions mentally.

Initially, children may use the beans to visualise the question. However, the goal is for the children to answer the questions mentally.

In Workbooks 2, 3 and 4, the foundational manipulating number skills are introduced. These include:

- Single-digit arithmetic
- Arithmetic with multiples of 10 (including adding to and subtracting from multiples of 10, 100 and 1 000 i.e. place value)
- Completing the 10s
- Bridging the 10s
- Doubling & Halving
- Multiplication Facts (*this is introduced by way of 'groups of' in the Grade 2 workbooks*)


The number range of the questions in this guide are generally higher than the questions in the corresponding workbook. Teachers should be sensitive

to the level of the children in their class/group and should adjust the questions asked to a suitable number range.


The children’s ability to reflect on their own thinking is critical during the learning process and is a skill that needs to be fostered by the teacher. Questions are asked in such a way that they should reveal certain patterns that children need to discover. In these support notes, there are dedicated intervals in which to ask the children questions such as, “What do you notice?” or “Can you explain how you got your answer?” These questions are to prompt the children to think about and reflect on their answers.


### Using this Guide


Below is an excerpt from these support notes. The middle column contains the information/ questions the teacher would ask during the manipulating numbers routine. The answers to the questions can be found in the last column. If a child gives the incorrect response, teachers must use the opportunity to clarify their understanding.


							What the teacher would say		What the child would say
Question Number	Description of activities For Teacher’s Reference only						Verbal question to be asked by the teacher	Number Sentence: For Teacher’s Reference only	Child’s response (If incorrect, teacher must use the opportunity to clarify the child’s understanding)
	Single Digit Arithmetic	Arithmetic with Multipl of 10	Completing the 10s	Bridging the 10s	Doubling & Halving	Multiplication Facts	NumberSense Workbook 1		
1							What is 2 plus 2?	$2 + 2 = \square$	4
2							What is 4 plus 2?	$4 + 2 = \square$	6


*Please note, for Workbooks 4-12, there is a corresponding learner Mental Arithmetic Booklet. This contains the number sentence and a space for the children to record their answers during the mental arithmetic routine.*


	Single Digit Arithmetic	Arithmetic with Multiples of 10	Completing the 10s	Bridging the 10s	Doubling & Halving	Multiplication Facts	NumberSense Workbook 1		1
1							I want you to look at the number line. Show me the number 2.		2
2							Which number comes after 2?		3
3							Which number comes before 2?		1
4							I want you to look at the number line. Show me the number 7.		7
5							Which number comes after 7?		8
6							Which number comes before 7?		6
7							I want you to look at the number line. Show me the number 5.		5
8							Which number comes after 5?		6
9							Which number comes before 5?		4
10							Which is more... 2 or 3?		3
11							Which is more... 3 or 1?		3
12							Which is more... 2 or 5?		5
13							Which is more... 4 or 3?		4
14							Which is more... 5 or 3?		5
15							Which is more... 7 or 8?		8
16							Which is more... 6 or 5?		6
17							Which is more... 6 or 3?		6
18							Which is more... 8 or 7?		8
19							Which is more... 3 or 2?		3
20							Which is more... 9 or 7?		9
21							Which is more... 5 or 4?		5
22							Which is more... 1 or 2?		2
23							Which is more... 7 or 5?		7
24							Which is more... 6 or 7?		7
25							Which is more... 4 or 3?		4


	Single Digit Arithmetic	Arithmetic with Multiples of 10	Completing the 10s	Bridging the 10s	Doubling & Halving	Multiplication Facts	NumberSense Workbook 1		2
1							Which is more... 1 or 4?		4
2							Which is more... 5 or 2?		5
3							Which is more... 4 or 2?		4
4							Which is more... 3 or 4?		4
5							Which is more... 3 or 5?		5
6							Which is more... 7 or 4?		7
7							Which is more... 1 or 3?		3
8							Which is more... 4 or 5?		5
9							Which is more... 8 or 6?		8
10							Which is more... 2 or 3?		3
11							Which is more... 2 or 1?		2
12							Which is more... 6 or 4?		6
13							Which is more... 6 or 5?		6
14							Which is more... 6 or 7?		7
15							Which is more... 3 or 4?		4
16							Which is more... 5 or 1?		5
17							Which is more... 6 or 4?		6
18							Which is more... 3 or 2?		3
19							Which is more... 2 or 4?		4
20							Which is more... 5 or 7?		7
21							Which is more... 5 or 8?		8
22							Which is more... 4 or 1?		4
23							Which is more... 7 or 4?		7
24							Which is more... 5 or 4?		5
25							Which is more... 6 or 7?		7


	Single Digit Arithmetic	Arithmetic with Multiples of 10	Completing the 10s	Bridging the 10s	Doubling & Halving	Multiplication Facts	NumberSense Workbook 1		3
1							I have 2. What is one more than 2?		3
2							I have 3. What is one more than 3?		4
3							I have 1. What is one more than 1?		2
4							I have 4. What is one more than 4?		5
5							I have 5. What is one more than 5?		6
6							I have 1. What is one more than 1?		2
7							I have 4. What is one more than 4?		5
8							I have 6. What is one more than 6?		7
9							I have 7. What is one more than 7?		8
10							I have 2. What is one more than 2?		3
11							I have 3. What is one more than 3?		4
12							I have 8. What is one more than 8?		9
13							I have 7. What is one more than 7?		8
14							I have 5. What is one more than 5?		6
15							I have 1. What is one more than 1?		2
16							I have 4. What is one more than 4?		5
17							I have 2. What is one more than 2?		3
18							I have 3. What is one more than 3?		4
19							I have 5. What is one more than 5?		6
20							I have 6. What is one more than 6?		7
21							I have 7. What is one more than 7?		8
22							I have 8. What is one more than 8?		9
23							I have 4. What is one more than 4?		5
24							I have 3. What is one more than 3?		4
25							I have 2. What is one more than 2?		3


	Single Digit Arithmetic	Arithmetic with Multiples of 10	Completing the 10s	Bridging the 10s	Doubling & Halving	Multiplication Facts	NumberSense Workbook 1		4
1							I want you to look at the number line. Show me the number 4.		4
2							Which number comes after 4?		5
3							Which number comes before 4?		3
4							I want you to look at the number line. Show me the number 2.		2
5							Which number comes after 2?		3
6							Which number comes before 2?		1
7							I want you to look at the number line. Show me the number 3.		3
8							Which number comes after 3?		4
9							Which number comes before 3?		2
10							I want you to look at the number line. Show me the number 5.		5
11							Which number comes after 5?		6
12							Which number comes before 5?		4
13							I want you to look at the number line. Show me the number 6.		6
14							Which number comes after 6?		7
15							Which number comes before 6?		5
16							I want you to look at the number line. Show me the number 4.		4
17							Which number comes after 4?		5
18							Which number comes before 4?		3
19							I want you to look at the number line. Show me the number 7.		7
20							Which number comes after 7?		8
21							Which number comes before 7?		6
22							I want you to look at the number line. Show me the number 5.		5
23							Which number comes after 5?		6
24							Which number comes before 5?		4
25							Which number comes after 5?		6


	Single Digit Arithmetic	Arithmetic with Multiples of 10	Completing the 10s	Bridging the 10s	Doubling & Halving	Multiplication Facts	NumberSense Workbook 1		5
1							I want you to look at the number line. Show me the number 5.		5
2							Which number comes after 5?		6
3							Which number comes before 5?		4
4							I want you to look at the number line. Show me the number 7.		7
5							Which number comes after 7?		8
6							Which number comes before 7?		6
7							I want you to look at the number line. Show me the number 3		3
8							Which number comes after 3?		4
9							Which number comes before 3?		2
10							I want you to look at the number line. Show me the number 2.		2
11							Which number comes after 2?		3
12							Which number comes before 2?		1
13							I want you to look at the number line. Show me the number 6.		6
14							Which number comes after 6?		7
15							Which number comes before 6?		5
16							I want you to look at the number line. Show me the number 4.		4
17							Which number comes after 4?		5
18							Which number comes before 4?		3
19							I want you to look at the number line. Show me the number 8.		8
20							Which number comes after 8?		9
21							Which number comes before 8?		7
22							I want you to look at the number line. Show me the number 5.		5
23							Which number comes after 5?		6
24							I want you to look at the number line. Show me the number 9.		9
25							Which number comes before 9?		8


	Single Digit Arithmetic	Arithmetic with Multiples of 10	Completing the 10s	Bridging the 10s	Doubling & Halving	Multiplication Facts	NumberSense Workbook 1		6
1							I want you to look at the number line. Show me the number 2.		2
2							Which number comes after 2?		3
3							Which number comes before 2?		1
4							I want you to look at the number line. Show me the number 7.		7
5							Which number comes after 7?		8
6							Which number comes before 7?		6
7							I want you to look at the number line. Show me the number 8.		8
8							Which number comes after 8?		9
9							Which number comes before 8?		7
10							I want you to look at the number line. Show me the number 5.		5
11							Which number comes after 5?		6
12							Which number comes before 5?		4
13							I want you to look at the number line. Show me the number 6.		6
14							Which number comes after 6?		7
15							Which number comes before 6?		5
16							I want you to look at the number line. Show me the number 4.		4
17							Which number comes after 4?		5
18							Which number comes before 4?		3
19							I want you to look at the number line. Show me the number 7.		7
20							Which number comes after 7?		8
21							Which number comes before 7?		6
22							I want you to look at the number line. Show me the number 1.		1
23							Which number comes after 1?		2
24							I want you to look at the number line. Show me the number 9.		9
25							Which number comes before 9?		8


	Single Digit Arithmetic	Arithmetic with Multiples of 10	Completing the 10s	Bridging the 10s	Doubling & Halving	Multiplication Facts	NumberSense Workbook 1		7
1							I have 3. What is one more than 3?		4
2							I have 5. What is one more than 5?		6
3							I have 2. What is one more than 2?		3
4							I have 5. What is one more than 5?		6
5							I have 1. What is one more than 1?		2
6							I have 4. What is one more than 4?		5
7							I have 7. What is one more than 7?		8
8							I have 8. What is one more than 8?		9
9							I have 3. What is one more than 3?		4
10							I have 4. What is one more than 4?		5
11							I have 7. What is one more than 7?		8
12							I have 3. What is one more than 3?		4
13							I have 4. What is one more than 4?		5
14							I have 5. What is one more than 5?		6
15							I have 7. What is one more than 7?		8
16							I have 2. What is one more than 2?		3
17							I have 1. What is one more than 1?		2
18							I have 3. What is one more than 3?		4
19							I have 4. What is one more than 4?		5
20							I have 5. What is one more than 5?		6
21							I have 6. What is one more than 6?		7
22							I have 8. What is one more than 8?		9
23							I have 1. What is one more than 1?		2
24							I have 4. What is one more than 4?		5
25							I have 3. What is one more than 3?		4


	Single Digit Arithmetic with Multiples of 10	Completing the 10s	Bridging the 10s	Doubling & Halving	Multiplication Facts	NumberSense Workbook 1		8
1						I want you to look at the number line. Show me the number 5.		5
2						Which number comes after 5?		6
3						Which number comes before 5?		4
4						I want you to look at the number line. Show me the number 7.		7
5						Which number comes after 7?		8
6						Which number comes before 7?		6
7						I want you to look at the number line. Show me the number 6.		6
8						Which number comes after 6?		7
9						Which number comes before 6?		5
10						I want you to look at the number line. Show me the number 5.		5
11						Which number comes after 5?		6
12						Which number comes before 5?		4
13						I want you to look at the number line. Show me the number 8.		8
14						Which number comes after 8?		9
15						Which number comes before 8?		7
16						I want you to look at the number line. Show me the number 4.		4
17						Which number comes before 4?		3
18						Which number comes after 4?		5
19						What is 1 more than 4?		5
20						What is 1 more than 7?		8
21						What is 1 more than 9?		10
22						What is 1 more than 3?		4
23						What is 1 more than 5?		6
24						What is 1 more than 6?		7
25						What is 1 more than 9?		10


	Single Digit Arithmetic	Arithmetic with Multiples of 10	Completing the 10s	Bridging the 10s	Doubling & Halving	Multiplication Facts	NumberSense Workbook 1		9
1							I want you to look at the number line. Show me the number 5.		5
2							Which number comes after 5?		6
3							Which number comes before 5?		4
4							I want you to look at the number line. Show me the number 3.		3
5							Which number comes after 3?		4
6							Which number comes before 3?		2
7							I want you to look at the number line. Show me the number 4.		4
8							Which number comes after 4?		5
9							Which number comes before 4?		3
10							I want you to look at the number line. Show me the number 10.		10
11							Which number comes before 10?		9
12							Which number comes after 10?		11
13							I want you to look at the number line. Show me the number 7.		7
14							Which number comes after 7?		8
15							Which number comes before 7?		6
16							I want you to look at the number line. Show me the number 8.		8
17							Which number comes after 8?		9
18							Which number comes before 8?		7
19							I want you to look at the number line. Show me the number 12.		12
20							Which number comes after 12?		13
21							Which number comes before 12?		11
22							I want you to look at the number line. Show me the number 1.		1
23							Which number comes after 1?		2
24							I want you to look at the number line. Show me the number 9.		9
25							Which number comes before 9?		8


	Single Digit Arithmetic Multiples of 10	Completing the 10s	Bridging the 10s	Doubling & Halving	Multiplication Facts	NumberSense Workbook 1		10
1						I want you to look at the number line. Show me the number 8.		8
2						Which number comes after 8?		9
3						Which number comes before 8?		7
4						I want you to look at the number line. Show me the number 12.		12
5						Which number comes after 12?		13
6						Which number comes before 12?		11
7						I want you to look at the number line. Show me the number 7.		7
8						Which number comes after 7?		8
9						Which number comes before 7?		6
10						I want you to look at the number line. Show me the number 6.		6
11						Which number comes after 6?		7
12						Which number comes before 6?		5
13						I want you to look at the number line. Show me the number 14.		14
14						Which number comes after 14?		15
15						Which number comes before 14?		13
16						I want you to look at the number line. Show me the number 5.		5
17						Which number comes before 5?		4
18						Which number comes after 5?		6
19						I want you to look at the number line. Show me the number 3.		3
20						Which number comes after 3?		4
21						Which number comes before 3?		2
22						I want you to look at the number line. Show me the number 1.		1
23						Which number comes after 1?		2
24						I want you to look at the number line. Show me the number 10.		10
25						Which number comes before 10?		9


	Single Digit Arithmetic	Arithmetic with Multiples of 10	Completing the 10s	Bridging the 10s	Doubling & Halving	Multiplication Facts	NumberSense Workbook 1		11
1							I want you to look at the number line. Show me the number 7.		7
2							Which number comes before 7?		6
3							Which number comes after 7?		8
4							I want you to look at the number line. Show me the number 17.		17
5							Which number comes after 17?		18
6							Which number comes before 17?		16
7							I want you to look at the number line. Show me the number 14.		14
8							Which number comes after 14?		15
9							Which number comes before 14?		13
10							I want you to look at the number line. Show me the number 6.		6
11							Which number comes before 6?		5
12							Which number comes after 6?		7
13							I want you to look at the number line. Show me the number 5.		5
14							Which number comes after 5?		6
15							Which number comes before 5?		4
16							I want you to look at the number line. Show me the number 15.		15
17							Which number comes before 15?		14
18							Which number comes after 15?		16
19							What is 1 more than 15?		16
20							What is 1 more than 5?		6
21							What is 1 more than 4?		5
22							What is 1 more than 14?		15
23							What is 1 more than 6?		7
24							What is 1 more than 8?		9
25							What is 1 more than 9?		10


	Single Digit Arithmetic Multiples of 10	Completing the 10s	Bridging the 10s	Doubling & Halving	Multiplication Facts	NumberSense Workbook 1		12
1						I want you to look at the number line. Show me the number 3.		3
2						Which number comes before 3?		2
3						Which number comes after 3?		4
4						I want you to look at the number line. Show me the number 6.		6
5						Which number comes after 6?		7
6						Which number comes before 6?		5
7						I want you to look at the number line. Show me the number 14.		14
8						Which number comes after 14?		15
9						Which number comes before 14?		13
10						I want you to look at the number line. Show me the number 2.		2
11						Which number comes after 2?		3
12						Which number comes before 2?		1
13						I want you to look at the number line. Show me the number 8.		8
14						Which number comes after 8?		9
15						Which number comes before 8?		7
16						I want you to look at the number line. Show me the number 10.		10
17						Which number comes after 10?		11
18						Which number comes before 10?		9
19						I want you to look at the number line. Show me the number 12.		12
20						Which number comes after 12?		13
21						Which number comes before 12?		11
22						I want you to look at the number line. Show me the number 16.		16
23						Which number comes after 16?		17
24						I want you to look at the number line. Show me the number 19.		19
25						Which number comes before 19?		18


	Single Digit Arithmetic	Arithmetic with Multiples of 10	Completing the 10s	Bridging the 10s	Doubling & Halving	Multiplication Facts	NumberSense Workbook 1		13
1							I want you to look at the number line. Show me the number 5.		5
2							What is 1 less than 5?		4
3							I want you to look at the number line. Show me the number 7.		7
4							What is 1 less than 7?		6
5							I want you to look at the number line. Show me the number 20.		20
6							What is 1 less than 20?		19
7							I want you to look at the number line. Show me the number 14.		14
8							What is 1 less than 14?		13
9							I want you to look at the number line. Show me the number 10.		10
10							What is 1 less than 10?		9
11							What is 1 less than 9?		8
12							What is 1 less than 8?		7
13							What is 1 less than 2?		1
14							What is 1 less than 3?		2
15							What is 1 less than 4?		3
16							What is 1 less than 6?		5
17							What is 1 less than 5?		4
18							What is 1 less than 7?		6
19							What is 1 less than 4?		3
20							What is 1 less than 3?		2
21							What is 1 less than 10?		9
22							What is 1 less than 5?		4
23							What is 1 less than 7?		6
24							What is 1 less than 4?		3
25							What is 1 less than 8?		7


	Single Digit Arithmetic Multiples of 10	Completing the 10s	Bridging the 10s	Doubling & Halving	Multiplication Facts	NumberSense Workbook 1		14
1						I want you to look at the number line. Show me the number 5.		5
2						Which number comes before 5?		4
3						Which number comes before 25?		24
4						Which number comes before 35?		34
5						Which number comes after 5?		6
6						Which number comes after 25?		26
7						Which number comes after 35?		36
						“What do you notice”		
8						I want you to look at the number line. Show me the number 9.		9
9						Which number comes before 9?		8
10						I want you to look at the number line. Show me the number 8.		8
11						Which number comes after 8?		9
12						Which number comes before 8?		7
13						I want you to look at the number line. Show me the number 12.		12
14						Which number comes after 12?		13
15						Which number comes before 12?		11
16						I want you to look at the number line. Show me the number 4.		4
17						Which number comes after 4?		5
18						Which number comes before 4?		3
19						I want you to look at the number line. Show me the number 16.		16
20						Which number comes after 16?		17
21						Which number comes before 16?		15
22						I want you to look at the number line. Show me the number 1.		1
23						Which number comes after 1?		2
24						I want you to look at the number line. Show me the number 9.		9
25						Which number comes before 9?		8


	Single Digit Arithmetic	Arithmetic with Multiples of 10	Completing the 10s	Bridging the 10s	Doubling & Halving	Multiplication Facts	NumberSense Workbook 1		15
1							I want you to imagine the number line. Find the number 10.		10
2							Which number comes after 10?		11
3							I want you to imagine the number line. Find the number 11.		11
4							Which number comes after 11?		12
5							Which number comes before 11?		10
6							I want you to imagine the number line. Find the number 14.		14
7							Which number comes after 14?		15
8							Which number comes before 14?		13
9							I want you to imagine the number line. Find the number 13.		13
10							Which number comes after 13?		14
11							Which number comes before 13?		12
12							I want you to imagine the number line. Find the number 15.		15
13							Which number comes after 15?		16
14							Which number comes before 15?		14
15							I want you to imagine the number line. Find the number 12.		12
16							Which number comes after 12?		13
17							Which number comes before 12?		11
18							I want you to imagine the number line. Find the number 8.		8
19							Which number comes after 8?		9
20							Which number comes before 8?		7
21							I want you to imagine the number line. Find the number 5.		5
22							Which number comes after 5?		6
23							Which number comes before 5?		4
24							I want you to imagine the number line. Find the number 9.		9
25							Which number comes before 9?		8


	Single Digit Arithmetic	Arithmetic with Multiples of 10	Completing the 10s	Bridging the 10s	Doubling & Halving	Multiplication Facts	NumberSense Workbook 1		16
1							I want you to imagine the number line. Find the number 10.		10
2							Which number comes after 10?		11
3							I want you to imagine the number line. Find the number 14.		14
4							Which number comes after 14?		15
5							Which number comes before 14?		13
6							I want you to imagine the number line. Find the number 17.		17
7							Which number comes after 17?		18
8							Which number comes before 17?		16
9							I want you to imagine the number line. Find the number 20.		20
10							Which number comes after 20?		21
11							Which number comes before 20?		19
12							I want you to imagine the number line. Find the number 21.		21
13							Which number comes after 21?		22
14							Which number comes before 21?		20
15							I want you to imagine the number line. Find the number 24.		24
16							Which number comes after 24?		25
17							Which number comes before 24?		23
18							I want you to imagine the number line. Find the number 15.		15
19							Which number comes after 15?		16
20							Which number comes before 15?		14
21							I want you to imagine the number line. Find the number 18.		18
22							Which number comes after 18?		19
23							Which number comes before 18?		17
24							I want you to imagine the number line. Find the number 9.		9
25							Which number comes before 9?		8


	Single Digit Arithmetic	Arithmetic with Multiples of 10	Completing the 10s	Bridging the 10s	Doubling & Halving	Multiplication Facts	NumberSense Workbook 1		17
1							I want you to imagine the number line. Find the number 9.		9
2							Which number comes before 9?		8
3							I want you to imagine the number line. Find the number 7.		7
4							Which number comes after 7?		8
5							Which number comes before 7?		6
6							I want you to imagine the number line. Find the number 10.		10
7							Which number comes after 10?		11
8							Which number comes before 10?		9
9							I want you to imagine the number line. Find the number 13.		13
10							Which number comes after 13?		14
11							Which number comes before 13?		12
12							I want you to imagine the number line. Find the number 16.		16
13							Which number comes after 16?		17
14							Which number comes before 16?		15
15							I want you to imagine the number line. Find the number 19.		19
16							Which number comes after 19?		20
17							Which number comes before 19?		18
18							What is 1 more than 6?		7
19							What is 1 more than 8?		9
20							What is 1 more than 4?		5
21							What is 1 more than 7?		8
22							What is 1 more than 5?		6
23							What is 1 more than 2?		3
24							What is 1 more than 8?		9
25							What is 1 more than 6?		7


	Single Digit Arithmetic	Arithmetic with Multiples of 10	Completing the 10s	Bridging the 10s	Doubling & Halving	Multiplication Facts	NumberSense Workbook 1		18
1							I want you to imagine the number line. Find the number 1.		1
2							Which number comes after 1?		2
3							I want you to imagine the number line. Find the number 20.		20
4							Which number comes after 21?		22
5							Which number comes after 31?		32
6							Which number comes after 41?		42
							"What do you notice?"		
7							I want you to imagine the number line. Find the number 18.		18
8							Which number comes before 18?		17
9							I want you to imagine the number line. Find the number 8.		8
10							Which number comes before 8?		7
11							Which number comes after 8?		9
12							I want you to imagine the number line. Find the number 18.		18
13							Which number comes after 18?		19
14							Which number comes before 18?		17
15							I want you to imagine the number line. Find the number 20.		20
16							Which number comes after 20?		21
17							Which number comes before 20?		19
18							I want you to imagine the number line. Find the number 23.		23
19							Which number comes after 23?		24
20							Which number comes before 23?		22
21							I want you to imagine the number line. Find the number 3.		3
22							Which number comes after 3?		4
23							Which number comes after 23?		24
24							Which number comes after 33?		34
25							Which number comes after 53?		54


	Single Digit Arithmetic	Arithmetic with Multiples of 10	Completing the 10s	Bridging the 10s	Doubling & Halving	Multiplication Facts	NumberSense Workbook 1		19
1							I want you to imagine the number line. Find the number 2.		2
2							Which number comes after 2?	<input type="text"/>	3
3							Which number comes before 2?	<input type="text"/>	1
4							I want you to imagine the number line. Find the number 22.		22
5							Which number comes after 22?	<input type="text"/>	23
6							Which number comes before 22?	<input type="text"/>	21
7							I want you to imagine the number line. Find the number 26.		26
8							Which number comes after 26?	<input type="text"/>	27
9							Which number comes before 26?	<input type="text"/>	25
10							I want you to imagine the number line. Find the number 27.		27
11							Which number comes after 27?	<input type="text"/>	28
12							Which number comes before 27?	<input type="text"/>	26
13							I want you to imagine the number line. Find the number 28.		28
14							Which number comes after 28?	<input type="text"/>	29
15							Which number comes before 28?	<input type="text"/>	27
16							I want you to imagine the number line. Find the number 4.		4
17							Which number is between 4 and 6?	<input type="text"/>	5
18							Which number is between 6 and 8?	<input type="text"/>	7
19							I want you to imagine the number line. Find the number 3.		3
20							Which number is between 3 and 5?	<input type="text"/>	4
21							Which number is between 5 and 7?	<input type="text"/>	6
22							I want you to imagine the number line. Find the number 8.		8
23							Which number is between 8 and 10?	<input type="text"/>	9
24							Which number is between 6 and 8?	<input type="text"/>	7
25							Which number is between 7 and 9?	<input type="text"/>	8


	Single Digit Arithmetic Multiples of 10	Completing the 10s	Bridging the 10s	Doubling & Halving	Multiplication Facts	NumberSense Workbook 1		20
1						I want you to imagine the number line. Find the number 4.		4
2						Which number comes after 4?		5
3						Which number comes before 4?		3
4						I want you to imagine the number line. Find the number 6.		6
5						Which number comes after 6?		7
6						Which number comes before 6?		5
7						I want you to imagine the number line. Find the number 8.		8
8						Which number comes after 8?		9
9						Which number comes before 8?		7
10						I want you to imagine the number line. Find the number 25.		25
11						Which number comes after 25?		26
12						Which number comes before 25?		24
13						I want you to imagine the number line. Find the number 28.		28
14						Which number comes after 28?		29
15						Which number comes before 28?		27
16						What is 1 more than 7?		8
17						What is 1 more than 6?		7
18						What is 1 more than 8?		9
19						What is 1 more than 4?		5
20						What is 1 more than 5?		6
21						What is 1 more than 8?		9
22						What is 1 more than 7?		8
23						What is 1 more than 1?		2
24						What is 1 more than 2?		3
25						What is 1 more than 3?		4


	Single Digit Arithmetic	Arithmetic with Multiples of 10	Completing the 10s	Bridging the 10s	Doubling & Halving	Multiplication Facts	NumberSense Workbook 1		21
1							I want you to imagine the number line. Find the number 12.		12
2							Which number is 1 more than 12?		13
3							Which number is 1 less than 12?		11
4							I want you to imagine the number line. Find the number 16.		16
5							Which number is 1 more than 16?		17
6							Which number is 1 less than 16?		15
7							I want you to imagine the number line. Find the number 18.		18
8							Which number is 1 more than 18?		19
9							Which number is 1 less than 18?		17
10							I want you to imagine the number line. Find the number 23.		23
11							Which number is 1 more than 23?		24
12							Which number is 1 less than 23?		22
13							I want you to imagine the number line. Find the number 25.		25
14							Which number is 1 more than 25?		26
15							Which number is 1 less than 25?		24
16							I want you to imagine the number line. Find the number 17.		17
17							Which number is 1 more than 17?		18
18							Which number is 1 less than 17?		16
19							I want you to imagine the number line. Find the number 27.		27
20							Which number is 1 more than 27?		28
21							Which number is 1 less than 27?		26
22							I want you to imagine the number line. Find the number 24.		24
23							Which number is 1 more than 24?		25
24							I want you to imagine the number line. Find the number 30.		30
25							Which number is 1 less than 30?		29


	Single Digit Arithmetic Multiples of 10	Completing the 10s	Bridging the 10s	Doubling & Halving	Multiplication Facts	NumberSense Workbook 1		22
1						I want you to imagine the number line. Find the number 13.		13
2						Which number is 1 more than 13?		14
3						Which number is 1 less than 13?		12
4						I want you to imagine the number line. Find the number 16.		16
5						Which number is 1 more than 16?		17
6						Which number is 1 less than 16?		15
7						I want you to imagine the number line. Find the number 19.		19
8						Which number is 1 more than 19?		20
9						Which number is 1 less than 19?		18
10						I want you to imagine the number line. Find the number 21.		21
11						Which number is 1 more than 21?		22
12						Which number is 1 less than 21?		20
13						I want you to imagine the number line. Find the number 26.		26
14						Which number is 1 more than 26?		27
15						Which number is 1 less than 26?		25
16						What is 1 more than 7?		8
17						What is 1 more than 6?		7
18						What is 1 more than 8?		9
19						What is 1 more than 4?		5
20						What is 1 more than 5?		6
21						What is 1 more than 10?		11
22						What is 1 more than 11?		12
23						What is 1 more than 12?		13
24						What is 1 more than 6?		7
25						What is 1 more than 5?		6


	Single Digit Arithmetic	Arithmetic with Multiples of 10	Completing the 10s	Bridging the 10s	Doubling & Halving	Multiplication Facts	NumberSense Workbook 1		23
1							What is 1 more than 4?		5
2							What is 1 more than 6?		7
3							What is 1 more than 8?		9
4							What is 1 more than 3?		4
5							What is 1 more than 2?		3
6							What is 1 more than 12?		13
7							What is 1 more than 3?		4
8							What is 1 more than 13?		14
9							What is 1 more than 8?		9
10							What is 1 more than 7?		8
11							What is 1 less than 7?		6
12							What is 1 less than 4?		3
13							What is 1 less than 5?		4
14							What is 1 less than 6?		5
15							What is 1 less than 8?		7
16							What is 1 less than 2?		1
17							What is 1 less than 12?		11
18							What is 1 less than 3?		2
19							What is 1 less than 13?		12
20							What is 1 less than 9?		8
21							What is 1 less than 6?		5
22							What is 1 less than 8?		7
23							What is 1 less than 12?		11
24							What is 1 less than 13?		12
25							What is 1 less than 14?		13


	Single Digit Arithmetic	Arithmetic with Multiples of 10	Completing the 10s	Bridging the 10s	Doubling & Halving	Multiplication Facts	NumberSense Workbook 1		24
1							I want you to imagine the number line. Find the number 8.		8
2							Which number comes after 8?		9
3							Which number comes before 8?		7
4							I want you to imagine the number line. Find the number 10.		10
5							Which number comes after 10?		11
6							Which number comes before 10?		9
7							I want you to imagine the number line. Find the number 12.		12
8							Which number comes after 12?		13
9							Which number comes before 12?		11
10							I want you to imagine the number line. Find the number 13.		13
11							Which number comes after 13?		14
12							What is 1 less than 5?		4
13							What is 1 less than 7?		6
14							What is 1 less than 8?		7
15							What is 1 less than 9?		8
16							What is 1 less than 11?		10
17							What is 1 less than 12?		11
18							What is 1 less than 4?		3
19							What is 1 less than 7?		6
20							What is 1 less than 5?		4
21							What is 1 less than 10?		9
22							What is 1 less than 8?		7
23							What is 1 less than 6?		5
24							What is 1 less than 2?		1
25							What is 1 less than 3?		2


	Single Digit Arithmetic Multiples of 10	Completing the 10s	Bridging the 10s	Doubling & Halving	Multiplication Facts	NumberSense Workbook 1		25
1						I want you to imagine the number line. Find the number 15.		15
2						Which number comes after 15?		16
3						Which number comes before 15?		14
4						I want you to imagine the number line. Find the number 22.		22
5						Which number comes after 22?		23
6						Which number comes before 22?		21
7						I want you to imagine the number line. Find the number 26.		26
8						Which number comes after 26?		27
9						Which number comes before 26?		25
10						I want you to imagine the number line. Find the number 27.		27
11						Which number comes after 27?		28
12						Which number comes before 27?		26
13						I want you to imagine the number line. Find the number 4.		4
14						Which number comes after 4?		5
15						Which number comes before 4?		3
16						Which number is 2 more than 4?		6
17						Which number is 2 less than 4?		2
18						I want you to imagine the number line. Find the number 3.		3
19						Which number comes after 3?		4
20						Which number comes before 3?		2
21						Which number is 2 more than 3?		5
22						Which number is 2 less than 6?		4
23						I want you to imagine the number line. Find the number 6.		6
24						Which number is 2 more than 6?		8
25						Which number is 2 less than 6?		4


	Single Digit Arithmetic	Arithmetic with Multiples of 10	Completing the 10s	Bridging the 10s	Doubling & Halving	Multiplication Facts	NumberSense Workbook 1		26
1							I want you to imagine the number line. Find the number 6.		6
2							Which number is 1 more than 6?		7
3							Which number is 1 less than 6?		5
4							Which number is 2 more than 6?		8
5							Which number is 2 less than 6?		4
6							I want you to imagine the number line. Find the number 14.		14
7							Which number is 1 more than 14?		15
8							Which number is 1 less than 14?		13
9							Which number is 2 more than 14?		16
10							Which number is 2 less than 14?		12
11							I want you to imagine the number line. Find the number 23.		23
12							Which number is 1 more than 23?		24
13							Which number is 1 less than 23?		22
14							Which number is 2 more than 23?		25
15							Which number is 2 less than 23?		21
16							I want you to imagine the number line. Find the number 7.		7
17							Which number is 1 more than 7?		8
18							Which number is 1 less than 7?		6
19							Which number is 2 more than 7?		9
20							Which number is 2 less than 7?		5
21							Which number is 3 more than 7?		10
22							Which number is 3 less than 7?		4
23							I want you to imagine the number line. Find the number 4.		4
24							Which number is 3 less than 4?		1
25							Which number is 3 more than 4?		7


	Single Digit Arithmetic	Arithmetic with Multiples of 10	Completing the 10s	Bridging the 10s	Doubling & Halving	Multiplication Facts	NumberSense Workbook 1		27
1							I want you to imagine the number line. Find the number 4.		4
2							Which number is 1 more than 4?		5
3							Which number is 1 less than 4?		3
4							Which number is 2 more than 4?		6
5							Which number is 2 less than 4?		2
6							I want you to imagine the number line. Find the number 6.		6
7							Which number is 1 more than 6?		7
8							Which number is 1 less than 6?		5
9							Which number is 2 more than 6?		8
10							Which number is 2 less than 6?		4
11							I want you to imagine the number line. Find the number 3.		3
12							Which number is 1 less than 3?		2
13							Which number is 1 more than 3?		4
14							Which number is 1 more than 23?		24
15							Which number is 1 more than 33?		34
16							Which number is 1 more than 43?		44
							"What do you notice?"		
17							I want you to imagine the number line. Find the number 20.		20
18							Which number is 1 more than 20?		21
19							Which number is 1 less than 20?		19
20							I want you to imagine the number line. Find the number 24.		24
21							Which number is 1 more than 24?		25
22							Which number is 1 less than 24?		23
23							I want you to imagine the number line. Find the number 27.		27
24							Which number is 1 more than 27?		28
25							Which number is 1 less than 27?		26


	Single Digit Arithmetic	Arithmetic with Multiples of 10	Completing the 10s	Bridging the 10s	Doubling & Halving	Multiplication Facts	NumberSense Workbook 1		28
1							Which number is between 3 and 5?		4
2							Which number is between 25 and 27?		26
3							Which number is between 22 and 24?		23
4							Which number is between 27 and 29?		28
5							Which number is between 19 and 21?		20
6							I want you to look at the number line. Show me the number 17.		17
7							Which number is 1 more than 17?		18
8							Which number is 1 less than 17?		16
9							Which number is 2 more than 17?		19
10							Which number is 2 less than 17?		15
11							I want you to look at the number line. Show me the number 5.		5
12							Which number is 1 more than 5?		6
13							Which number is 1 more than 25?		26
14							Which number is 2 less than 5?		3
15							Which number is 2 less than 25?		23
16							I want you to look at the number line. Show me the number 3.		3
17							Which number is 1 more than 3?		4
18							Which number is 1 less than 3?		2
19							Which number is 2 more than 3?		5
20							Which number is 2 less than 3?		1
21							I want you to look at the number line. Show me the number 6.		6
22							Which number is 1 more than 6?		7
23							Which number is 1 less than 6?		5
24							Which number is 2 more than 6?		8
25							Which number is 2 less than 6?		4


	Single Digit Arithmetic	Arithmetic with Multiples of 10	Completing the 10s	Bridging the 10s	Doubling & Halving	Multiplication Facts	NumberSense Workbook 1		29
1							I want you to imagine the number line. Find the number 6.		6
2							Which number is 2 more than 6?		8
3							Which number is 3 more than 6?		9
4							Which number is 2 less than 6?		4
5							Which number is 3 less than 6?		3
6							I want you to imagine the number line. Find the number 13.		13
7							Which number is 1 more than 13?		14
8							Which number is 2 more than 13?		15
9							Which number is 2 less than 13?		11
10							Which number is 1 less than 13?		12
11							I want you to imagine the number line. Find the number 17.		17
12							Which number is 1 more than 17?		18
13							Which number is 2 less than 17?		15
14							What is 2 less than 17?		15
15							What is 1 less than 17?		16
16							What is 1 less than 12?		11
17							What is 1 less than 14?		13
18							What is 1 less than 18?		17
19							What is 1 less than 8?		7
20							What is 1 less than 9?		8
21							What is 1 less than 5?		4
22							What is 1 less than 3?		2
23							What is 1 less than 7?		6
24							What is 1 less than 4?		3
25							What is 1 less than 14?		13


	Single Digit Arithmetic Multiples of 10	Completing the 10s	Bridging the 10s	Doubling & Halving	Multiplication Facts	NumberSense Workbook 1		30
1						What is 1 more than 4?		5
2						What is 1 more than 6?		7
3						What is 2 more than 3?		5
4						What is 2 more than 7?		9
5						What is 1 more than 8?		9
6						What is 1 more than 2?		3
7						What is 1 more than 5?		6
8						What is 2 more than 5?		7
9						What is 3 more than 5?		8
10						What is 1 more than 1?		2
11						What is 1 more than 3?		4
12						What is 2 more than 4?		6
13						What is 1 less than 4?		3
14						What is 1 less than 7?		6
15						What is 1 less than 6?		5
16						What is 2 less than 6?		4
17						What is 1 less than 9?		8
18						What is 1 less than 11?		10
19						What is 1 less than 7?		6
20						What is 1 less than 9?		8
21						What is 1 less than 5?		4
22						What is 1 less than 6?		5
23						What is 2 less than 4?		2
24						What is 2 less than 9?		7
25						What is 2 less than 11?		9


	Single Digit Arithmetic	Arithmetic with Multiples of 10	Completing the 10s	Bridging the 10s	Doubling & Halving	Multiplication Facts	NumberSense Workbook 1		31
1							I want you to imagine the number line. Find the number 4.		4
2							Which number is 1 more than 4?		5
3							Which number is 1 less than 4?		3
4							Which number is 2 more than 4?		6
5							Which number is 2 less than 4?		2
6							I want you to imagine the number line. Find the number 6.		6
7							Which number is 1 more than 6?		7
8							Which number is 1 more than 26?		27
9							Which number is 1 more than 36?		37
10							Which number is 1 more than 56?		57
							"What do you notice?"		
11							I want you to imagine the number line. Find the number 8.		8
12							Which number is 1 more than 8?		9
13							Which number is 1 less than 8?		7
14							Which number is 2 more than 8?		10
15							Which number is 2 less than 8?		6
16							I want you to imagine the number line. Find the number 10.		10
17							Which number is 1 more than 10?		11
18							Which number is 1 less than 10?		9
19							Which number is 2 more than 10?		12
20							Which number is 2 less than 10?		8
21							I want you to imagine the number line. Find the number 14.		14
22							Which number is 1 more than 14?		15
23							Which number is 1 less than 14?		13
24							Which number is 2 more than 14?		16
25							Which number is 2 less than 14?		12


	Single Digit Arithmetic Multiples of 10	Completing the 10s	Bridging the 10s	Doubling & Halving	Multiplication Facts	NumberSense Workbook 1		32
1						I want you to imagine the number line. Find the number 3.		3
2						Which number is 1 more than 3?		4
3						Which number is 1 less than 3?		2
4						I want you to imagine the number line. Find the number 9.		9
5						Which number is 1 more than 9?		10
6						Which number is 1 less than 9?		8
7						I want you to imagine the number line. Find the number 13.		13
8						Which number is 1 more than 13?		14
9						Which number is 1 less than 13?		12
10						I want you to imagine the number line. Find the number 16.		16
11						Which number is 1 more than 16?		17
12						Which number is 1 less than 16?		15
13						I want you to imagine the number line. Find the number 20.		20
14						Which number is 1 more than 20?		21
15						Which number is 1 less than 20?		19
16						I want you to imagine the number line. Find the number 21.		21
17						Which number is 1 more than 21?		22
18						Which number is 1 less than 21?		20
19						I want you to imagine the number line. Find the number 24.		24
20						Which number is 1 more than 24?		25
21						Which number is 1 less than 24?		23
22						I want you to imagine the number line. Find the number 25.		25
23						Which number is 1 more than 25?		26
24						I want you to imagine the number line. Find the number 30.		30
25						Which number is 1 less than 30?		29


	Single Digit Arithmetic Multiples of 10	Completing the 10s	Bridging the 10s	Doubling & Halving	Multiplication Facts	NumberSense Workbook 1		33
1						I want you to imagine the number line. Find the number 3.		3
2						Which number is 1 more than 3?		4
3						Which number is 1 less than 3?		2
4						Which number is 2 more than 3?		5
5						Which number is 2 less than 3?		1
6						I want you to imagine the number line. Find the number 4.		4
7						Which number is 1 more than 4?		5
8						Which number is 1 less than 4?		3
9						Which number is 2 more than 4?		6
10						Which number is 2 less than 4?		2
11						I want you to imagine the number line. Find the number 5.		5
12						Which number is 1 more than 5?		6
13						Which number is 1 less than 5?		4
14						Which number is 2 more than 5?		7
15						Which number is 2 less than 5?		3
16						I want you to imagine the number line. Find the number 7.		7
17						Which number is 1 more than 7?		8
18						Which number is 1 less than 7?		6
19						Which number is 2 more than 7?		9
20						Which number is 2 less than 7?		5
21						Which number is between 27 and 29?		28
22						Which number is between 21 and 23?		22
23						Which number is between 31 and 33?		32
24						Which number is between 41 and 43?		42
25						Which number is between 51 and 53?		52


	Single Digit Arithmetic	Arithmetic with Multiples of 10	Completing the 10s	Bridging the 10s	Doubling & Halving	Multiplication Facts	NumberSense Workbook 1		34
1							I want you to imagine the number line. Find the number 23.		23
2							Which number is 1 more than 23?		24
3							Which number is 1 less than 23?		22
4							I want you to imagine the number line. Find the number 25.		25
5							Which number is 1 more than 25?		26
6							Which number is 1 less than 25?		24
7							I want you to imagine the number line. Find the number 29.		29
8							Which number is 1 more than 29?		30
9							Which number is 1 less than 29?		28
10							I want you to imagine the number line. Find the number 31.		31
11							Which number is 1 more than 31?		32
12							Which number is 1 less than 31?		30
13							I want you to imagine the number line. Find the number 4.		4
14							Which number is 1 more than 4?		5
15							Which number is 1 less than 4?		3
16							Which number is 2 more than 4?		6
17							Which number is 2 less than 4?		2
18							I want you to imagine the number line. Find the number 16.		16
19							Which number is 1 more than 16?		17
20							Which number is 1 less than 16?		15
21							Which number is 2 more than 16?		18
22							Which number is 2 less than 16?		14
23							I want you to imagine the number line. Find the number 2.		2
24							Which number is 2 more than 2?		4
25							Which number is 2 less than 2?		0


	Single Digit Arithmetic	Arithmetic with Multiples of 10	Completing the 10s	Bridging the 10s	Doubling & Halving	Multiplication Facts	NumberSense Workbook 1		35
1							Which is more... 12 or 10?		12
2							Which is more... 15 or 10?		15
3							Which is more... 12 or 13?		13
4							Which is more... 14 or 16?		16
5							Which is more... 20 or 10?		20
6							Which is more... 16 or 19?		19
7							Which is more... 13 or 17?		17
8							I want you to imagine the number line. Find the number 5.		5
9							Which number is 1 more than 5?		6
10							Which number is 1 less than 5?		4
11							Which number is 2 more than 5?		7
12							Which number is 2 less than 5?		3
13							I want you to imagine the number line. Find the number 7.		7
14							Which number is 1 more than 7?		8
15							Which number is 1 less than 7?		6
16							Which number is 2 more than 7?		9
17							Which number is 2 less than 7?		5
18							I want you to imagine the number line. Find the number 13.		13
19							Which number is 1 more than 13?		14
20							Which number is 1 less than 13?		12
21							Which number is 2 more than 13?		15
22							Which number is 2 less than 13?		11
23							I want you to imagine the number line. Find the number 8.		8
24							Which number is 1 more than 8?		9
25							Which number is 1 less than 8?		7

	Single Digit Arithmetic Multiples of 10	Completing the 10s	Bridging the 10s	Doubling & Halving	Multiplication Facts	NumberSense Workbook 1		36
1						I want you to imagine the number line. Find the number 3.		3
2						Which number is 1 more than 3?		4
3						Which number is 1 less than 3?		2
4						I want you to imagine the number line. Find the number 8.		8
5						Which number is 1 more than 8?		9
6						Which number is 1 less than 8?		7
7						I want you to imagine the number line. Find the number 4.		4
8						Which number is 1 more than 4?		5
9						Which number is 1 less than 4?		3
10						Which number is 2 more than 4?		6
11						Which number is 2 less than 4?		2
12						I want you to imagine the number line. Find the number 5.		5
13						Which number is 1 more than 5?		6
14						Which number is 1 less than 5?		4
15						Which number is 2 more than 5?		7
16						Which number is 2 less than 5?		3
17						What is 2 more than 3?		5
18						What is 2 more than 5?		7
19						What is 2 more than 7?		9
20						What is 2 more than 8?		10
21						What is 2 more than 6?		8
22						What is 2 more than 4?		6
23						What is 2 more than 2?		4
24						What is 2 more than 5?		7
25						What is 2 more than 7?		9

	Single Digit Arithmetic	Arithmetic with Multiples of 10	Completing the 10s	Bridging the 10s	Doubling & Halving	Multiplication Facts	NumberSense Workbook 1		37
1							I want you to imagine the number line. Find the number 20.		20
2							Which number is 1 more than 20?		21
3							Which number is 1 less than 20?		19
4							I want you to imagine the number line. Find the number 22.		22
5							Which number is 1 more than 22?		23
6							Which number is 1 less than 22?		21
7							I want you to imagine the number line. Find the number 24.		24
8							Which number is 1 more than 24?		25
9							Which number is 1 less than 24?		23
10							I want you to imagine the number line. Find the number 27.		27
11							Which number is 1 more than 27?		28
12							Which number is 1 less than 27?		26
13							I want you to imagine the number line. Find the number 30.		30
14							Which number is 1 more than 30?		31
15							Which number is 1 less than 30?		29
16							I want you to imagine the number line. Find the number 33.		33
17							Which number is 1 more than 33?		34
18							Which number is 1 less than 33?		32
19							I want you to imagine the number line. Find the number 35.		35
20							Which number is 1 more than 35?		36
21							Which number is 1 less than 35?		34
22							I want you to imagine the number line. Find the number 40.		40
23							Which number is 1 less than 40?		39
24							I want you to imagine the number line. Find the number 39.		39
25							Which number is 1 less than 39?		38

	Single Digit Arithmetic Multiples of 10	Completing the 10s	Bridging the 10s	Doubling & Halving	Multiplication Facts	NumberSense Workbook 1		38
1						I want you to imagine the number line. Find the number 20		20
2						Which number is 1 more than 20?		21
3						Which number is 2 more than 20?		22
4						Which number is 1 less than 20?		19
5						Which number is 2 less than 20?		18
6						Which number is 3 more than 20?		23
7						Which number is 3 less than 20?		17
8						I want you to imagine the number line. Find the number 15		15
9						Which number is 1 more than 15?		16
10						Which number is 2 more than 15?		17
11						Which number is 3 more than 15?		18
12						Which number is 2 less than 15?		13
13						Which number is 1 less than 15?		14
14						What is 1 more than 5?		6
15						What is 2 more than 8?		10
16						What is 1 more than 9?		10
17						What is 2 more than 3?		5
18						What is 2 more than 6?		8
19						What is 1 more than 6?		7
20						What is 1 more than 26?		27
21						What is 1 more than 36?		37
22						What is 1 more than 46?		47
						"What do you notice?"		
23						What is 2 more than 10?		12
24						What is 2 more than 12?		14
25						What is 2 more than 14?		16

	Single Digit Arithmetic	Arithmetic with Multiples of 10	Completing the 10s	Bridging the 10s	Doubling & Halving	Multiplication Facts	NumberSense Workbook 1		39
1							Which is more... 20 or 21?		21
2							Which is more... 18 or 17?		18
3							Which is more... 15 or 18?		18
4							Which is more... 14 or 40?		40
5							Which is more... 20 or 10?		20
6							Which is more... 16 or 19?		19
7							Which is more... 13 or 30?		30
8							I want you to imagine the number line. Find the number 5.		5
9							Which number is 1 more than 5?		6
10							Which number is 1 less than 5?		4
11							Which number is 2 more than 5?		7
12							Which number is 2 less than 5?		3
13							I want you to imagine the number line. Find the number 15.		15
14							Which number is 1 more than 15?		16
15							Which number is 1 less than 15?		14
16							Which number is 2 more than 15?		17
17							Which number is 2 less than 15?		13
18							I want you to imagine the number line. Find the number 37.		37
19							Which number is 1 more than 37?		38
20							Which number is 1 less than 37?		36
21							Which number is 2 more than 37?		39
22							Which number is 2 less than 37?		35
23							I want you to imagine the number line. Find the number 42.		42
24							Which number is 1 more than 42?		43
25							Which number is 1 less than 42?		41


	Single Digit Arithmetic	Arithmetic with Multiples of 10	Completing the 10s	Bridging the 10s	Doubling & Halving	Multiplication Facts	NumberSense Workbook 1		40
1							I want you to imagine the number line. Find the number 6.		6
2							Which number is 1 more than 6?		7
3							Which number is 1 less than 6?		5
4							Which number is 2 more than 6?		8
5							Which number is 2 less than 6?		4
6							I want you to imagine the number line. Find the number 16.		16
7							Which number is 1 more than 16?		17
8							Which number is 1 less than 16?		15
9							Which number is 2 more than 16?		18
10							Which number is 2 less than 16?		14
11							I want you to imagine the number line. Find the number 17.		17
12							Which number is 1 more than 17?		18
13							Which number is 1 less than 17?		16
14							Which number is 2 more than 17?		19
15							Which number is 2 less than 17?		15
16							I want you to imagine the number line. Find the number 13.		13
17							Which number is 2 more than 13?		15
18							Which number is 3 more than 13?		16
19							Which number is 2 less than 13?		11
20							Which number is 3 less than 13?		10
21							I want you to imagine the number line. Find the number 20.		20
22							Which number is 2 more than 20?		22
23							Which number is 3 more than 20?		23
24							Which number is 2 less than 20?		18
25							Which number is 3 less than 20?		17

# NumberSense Workbook 1



41

	Single Digit Arithmetic Multiples of 10	Completing the 10s	Bridging the 10s	Doubling & Halving	Multiplication Facts		
1						I want you to imagine the number line. Find the number 32.	32
2						Which number is 1 more than 32?	33
3						Which number is 1 less than 32?	31
4						I want you to imagine the number line. Find the number 33.	33
5						Which number is 1 more than 33?	34
6						Which number is 1 less than 33?	32
7						I want you to imagine the number line. Find the number 35.	35
8						Which number is 1 more than 35?	36
9						Which number is 1 less than 35?	34
10						I want you to imagine the number line. Find the number 37.	37
11						Which number is 1 more than 37?	38
12						Which number is 1 less than 37?	36
13						I want you to imagine the number line. Find the number 43.	43
14						Which number is 1 more than 43?	44
15						Which number is 1 less than 43?	42
16						I want you to imagine the number line. Find the number 44.	44
17						Which number is 1 more than 44?	45
18						Which number is 1 less than 44?	43
19						I want you to imagine the number line. Find the number 45.	45
20						Which number is 1 more than 45?	46
21						Which number is 1 less than 45?	44
22						I want you to imagine the number line. Find the number 40.	40
23						Which number is 1 less than 40?	39
24						I want you to imagine the number line. Find the number 39.	39
25						Which number is 1 less than 39?	38


	Single Digit Arithmetic Multiples of 10	Completing the 10s	Bridging the 10s	Doubling & Halving	Multiplication Facts	NumberSense Workbook 1		42
1						I want you to imagine the number line. Find the number 13.		13
2						Which number is 2 more than 13?		15
3						Which number is 3 more than 13?		16
4						I want you to imagine the number line. Find the number 18.		18
5						Which number is 1 more than 18?		19
6						Which number is 3 more than 18?		21
7						I want you to imagine the number line. Find the number 4.		4
8						Which number is 2 more than 4?		6
9						Which number is 2 less than 4?		2
10						Which number is 3 more than 4?		7
11						Which number is 3 less than 4?		1
12						I want you to imagine the number line. Find the number 16.		16
13						Which number is 1 more than 16?		17
14						Which number is 1 less than 16?		15
15						Which number is 2 more than 16?		18
16						Which number is 2 less than 16?		14
17						I want you to imagine the number line. Find the number 2.		2
18						Which number is 1 more than 2?		3
19						Which number is 3 more than 2?		5
20						Which number is 2 less than 2?		0
21						Which number is 1 less than 2?		1
22						I want you to imagine the number line. Find the number 22.		22
23						Which number is 3 more than 22?		25
24						Which number is 2 more than 22?		24
25						Which number is 2 less than 22?		20


# NumberSense Workbook 1





43

	Single Digit Arithmetic	Arithmetic with Multiples of 10	Completing the 10s	Bridging the 10s	Doubling & Halving	Multiplication Facts		
1							Which is more... 13 or 9?	13
2							Which is more... 12 or 21?	21
3							Which is more... 9 or 19?	19
4							Which is more... 13 or 14?	14
5							Which is more... 15 or 17?	17
6							Which is more... 23 or 24?	24
7							Which is more... 16 or 11?	16
8							I want you to imagine the number line. Find the number 2.	2
9							Which number is 2 more than 2?	4
10							Which number is 2 less than 2?	0
11							I want you to imagine the number line. Find the number 4.	4
12							Which number is 2 more than 4?	6
13							Which number is 2 less than 4?	2
14							I want you to imagine the number line. Find the number 6.	6
15							Which number is 2 more than 6?	8
16							Which number is 2 less than 6?	4
17							I want you to imagine the number line. Find the number 8.	8
18							Which number is 2 more than 8?	10
19							Which number is 2 less than 8?	6
20							I want you to imagine the number line. Find the number 10.	10
21							Which number is 2 more than 10?	12
22							Which number is 2 less than 10?	8
23							I want you to imagine the number line. Find the number 12.	12
24							Which number is 2 more than 12?	14
25							Which number is 2 less than 12?	10

	Single Digit Arithmetic Multiples of 10	Completing the 10s	Bridging the 10s	Doubling & Halving	Multiplication Facts	NumberSense Workbook 1		44
1						I want you to imagine the number line. Find the number 4.		4
2						Which number is 1 more than 4?		5
3						Which number is 1 less than 4?		3
4						Which number is 2 more than 4?		6
5						Which number is 2 less than 4?		2
6						I want you to imagine the number line. Find the number 14.		14
7						Which number is 1 more than 14?		15
8						Which number is 1 less than 14?		13
9						Which number is 2 more than 14?		16
10						Which number is 2 less than 14?		12
11						I want you to imagine the number line. Find the number 24.		24
12						Which number is 1 more than 24?		25
13						Which number is 1 less than 24?		23
14						Which number is 2 more than 24?		26
15						Which number is 2 less than 24?		22
16						I want you to imagine the number line. Find the number 34.		34
17						Which number is 1 more than 34?		35
18						Which number is 1 less than 34?		33
19						Which number is 2 more than 34?		36
20						Which number is 2 less than 34?		32
21						I want you to imagine the number line. Find the number 26.		26
22						Which number is 1 more than 26?		27
23						Which number is 1 less than 26?		25
24						Which number is 2 more than 26?		28
25						Which number is 2 less than 26?		24

	Single Digit Arithmetic Multiples of 10	Completing the 10s	Bridging the 10s	Doubling & Halving	Multiplication Facts	NumberSense Workbook 1		45
1						I want you to imagine the number line. Find the number 6.		6
2						Which number is 1 more than 6?		7
3						Which number is 1 less than 6?		5
4						Which number is 2 more than 6?		8
5						Which number is 2 less than 6?		4
6						I want you to imagine the number line. Find the number 5.		5
7						Which number is 1 more than 5?		6
8						Which number is 1 less than 5?		4
9						Which number is 2 more than 5?		7
10						Which number is 2 less than 5?		3
11						I want you to imagine the number line. Find the number 37.		37
12						Which number is 1 more than 37?		38
13						Which number is 1 less than 37?		36
14						Which number is 2 more than 37?		39
15						Which number is 2 less than 37?		35
16						I want you to imagine the number line. Find the number 27.		27
17						Which number is 1 more than 27?		28
18						Which number is 1 less than 27?		26
19						Which number is 2 more than 27?		29
20						Which number is 2 less than 27?		25
21						I want you to imagine the number line. Find the number 17.		17
22						Which number is 1 more than 17?		18
23						Which number is 1 less than 17?		16
24						Which number is 2 more than 17?		19
25						Which number is 2 less than 17?		15

	Single Digit Arithmetic	Arithmetic with Multiples of 10	Completing the 10s	Bridging the 10s	Doubling & Halving	Multiplication Facts	NumberSense Workbook 1		46
1							I want you to imagine the number line. Find the number 3.		3
2							What is 1 more than 3?		4
3							What is 1 less than 3?		2
4							I want you to imagine the number line. Find the number 7.		7
5							What is 1 more than 7?		8
6							What is 1 less than 7?		6
7							I want you to imagine the number line. Find the number 5.		5
8							What is 1 more than 5?		6
9							What is 1 less than 5?		4
10							I want you to imagine the number line. Find the number 10.		10
11							What is 1 more than 10?		11
12							What is 1 less than 10?		9
13							I want you to imagine the number line. Find the number 6.		6
14							What is 1 more than 6?		7
15							What is 1 less than 6?		5
16							I want you to imagine the number line. Find the number 4.		4
17							What is 1 more than 4?		5
18							What is 1 less than 4?		3
19							I want you to imagine the number line. Find the number 2.		2
20							What is 1 more than 2?		3
21							What is 1 less than 2?		1
22							I want you to imagine the number line. Find the number 12.		12
23							What is 1 more than 12?		13
24							I want you to imagine the number line. Find the number 9.		9
25							What is 1 less than 9?		8

	Single Digit Arithmetic Multiples of 10	Completing the 10s	Bridging the 10s	Doubling & Halving	Multiplication Facts	NumberSense Workbook 1		47
1						I want you to imagine the number line. Find the number 6.		6
2						What is 2 more than 6?		8
3						What is 2 less than 6?		4
4						I want you to imagine the number line. Find the number 16.		16
5						What is 2 more than 16?		18
6						What is 2 less than 16?		14
7						I want you to imagine the number line. Find the number 4.		4
8						What is 2 more than 4?		6
9						What is 2 less than 4?		2
10						I want you to imagine the number line. Find the number 14.		14
11						What is 2 more than 14?		16
12						What is 2 less than 14?		12
13						I want you to imagine the number line. Find the number 24.		24
14						What is 2 more than 24?		26
15						What is 2 less than 24?		22
16						I want you to imagine the number line. Find the number 8.		8
17						What is 2 more than 8?		10
18						What is 2 less than 8?		6
19						I want you to imagine the number line. Find the number 30.		30
20						What is 2 more than 30?		32
21						What is 2 less than 30?		28
22						I want you to imagine the number line. Find the number 42.		42
23						What is 2 more than 42?		44
24						I want you to imagine the number line. Find the number 48.		48
25						What is 2 less than 48?		46

# NumberSense Workbook 1



48

	Single Digit Arithmetic	Arithmetic with Multiples of 10	Completing the 10s	Bridging the 10s	Doubling & Halving	Multiplication Facts		
1							Which number is 2 more than 2?	4
2							Which number is 3 more than 3?	6
3							Which number is 2 more than 1?	3
4							Which number is 2 more than 4?	6
5							Which number is 3 more than 7?	10
6							Which number is 2 more than 5?	7
7							Which number is 2 more than 11?	13
8							Which number is 2 more than 12?	14
9							Which number is 3 more than 12?	15
10							Which number is 2 more than 6?	8
11							Which number is 2 less than 4?	2
12							Which number is 2 less than 5?	3
13							Which number is 3 less than 6?	3
14							Which number is 2 less than 7?	5
15							Which number is 3 less than 8?	5
16							Which number is 2 less than 8?	6
17							Which number is 2 less than 9?	7
18							Which number is 2 less than 11?	9
19							Which number is 2 less than 10?	8
20							Which number is 3 less than 8?	5
21							Which number is 2 less than 5?	3
22							Which number is 2 less than 11?	9
23							Which number is 2 less than 8?	6
24							Which number is 3 less than 9?	6
25							Which number is 2 less than 12?	10

